



INDIAN SCHOOL AL WADI AL KABIR

DEPARTMENT OF MATHEMATICS (2021-2022)





TOPIC: MEASUREMENTS

WORKSHEET

RESOURCE PERSON: Ms. Rashmi Kaslikar

NAME: _____ CLASS: III SEC: _____ DATE: _____

I. Fill in the blanks with the correct unit.

- a)  Weight of the puppy is about 7 _____
- b.  Oil can of 5 _____
- c.  weighs about 150 _____
- d.  The length of a pen is about 18 _____
- e. Distance between Muscat between Sur is 200 _____

II. Choose the correct answer.

1) 1 kilometre is equal to:

- a) 100 kg b) 1000 cm c) 1000 m d) 100 ml

2) 6 kg and 250 g make:

- a) 6000 g b) 6250 g c) 6 kg 500 g d) 6250 kg

3) 8 km 70 m

- a) 870 m b) 8700 km c) 8000 km d) 8070 m

4) 500 cm is equal to:

- a) 5000 cm b) 5 m c) 5 km d) 500 m

5) 9 m 75 cm

- a) 975 cm b) 9075 m c) 9000 cm d) 975 m

III. Circle the correct answer:

1. The standard unit of measuring capacity is:

- i) kilometer ii) litre iii) gram iv) metre

2. $500 \text{ g} + \underline{\hspace{2cm}} = 1 \text{ kg}$

- i) 400 g ii) 500 g iii) 100 g iv) 1000 g

3. The capacity of an oil container is 100 l . It is filled with 65 l of oil. How much more oil can be filled in it?

- i) 40 l ii) 45 l iii) 35 l iv) 45 ml

4) To convert centrimetre to metre, we

- i) multiply by 100 ii) divide by 100 iii) multiply by 1000 iv) divide by 1000

5) What should be added in 850 ml to get the sum as a litre?

- i) 100 ml ii) 50 ml iii) 150 ml iv) 200 ml

IV. Solve:

1. What should be the measure of a glass if we want to pour 5 l of water in 5 glasses?

Ans: _____

2. The weight of Tina's bag is 5 kg and Dia's bag weighs 7 kg , whose bag is heavier and by how much?

Ans: _____

3. A tetra pack contains 250 ml of juice. How many such packets are needed to fill a jug of capacity 2 l ?

Ans: _____